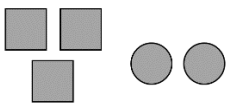
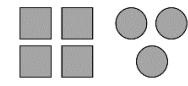




Name:

Weekly Math Homework – Q1:4

Teacher:

Monday	Tuesday	Wednesday	Thursday
Find an equivalent fraction. $\frac{5}{6} = \underline{\quad}$ $\frac{3}{4} = \underline{\quad}$	Use Order of Operations to solve. $(50 \div 2) + 5^3 - 5$	Find an equivalent fraction. $\frac{1}{2} = \underline{\quad}$ $\frac{1}{3} = \underline{\quad}$	Use Order of Operations to solve. $(21 \div 7) + 6 + 3^3$
Find the sum. $\begin{array}{r} 637,391 \\ + 372,088 \\ \hline \end{array}$	Find the difference. $\begin{array}{r} 256,805 \\ - 136,667 \\ \hline \end{array}$	Find the product. $\begin{array}{r} 6,372 \\ \times 75 \\ \hline \end{array}$	Find the quotient. $15 \overline{) 4,378}$
Kathy is baking cakes. Each cake requires $\frac{1}{12}$ of a teaspoon of vanilla, and she has $\frac{9}{12}$ of a teaspoon, how many cakes can she bake?	Find the quotient. $\frac{8}{11} \div \frac{3}{5} =$	A strip of paper is $\frac{9}{10}$ of an inch long. You need to cut the paper into $\frac{3}{12}$ inch pieces. How many pieces will you be able to cut?	Find the quotient. $\frac{4}{5} \div \frac{3}{7} =$
Find the quotient. $21 \overline{) 3,479}$	Find the quotient. $18 \overline{) 3,784}$	Find the quotient. $17 \overline{) 6,613}$	Find the quotient. $12 \overline{) 5,434}$
Find the sum. $85.560 + 53.339$	Find the product. $43.07 \times 1.8$	Find the sum. $58.887 + 92.234$	Find the product. $31.24 \times 3.9$
Find the difference. $65.440 - 43.879$	Find the quotient. $23.70 \div 1.8$	Find the difference. $85.777 - 42.432$	Find the quotient. $24.31 \div 2.6$
What is the <b>LCM</b> of 2 and 5?	Use the Distributive Property to express $14 + 63$	What is the <b>LCM</b> of 3 and 4?	A red string of holiday lights blinks once every 3 seconds, while a string of blue lights blink once every 4 seconds. How many times will both sets of lights blink at the same time in 1 minute (60 seconds)?
What is the <b>GCF</b> of 54 and 32?	Emma says the GCF of 16 and 12 is 48. Her friend Grace says the answer is 4. Who is right? Explain.	What is the <b>GCF</b> of 28 and 72?	Angie baked 100 cookies and 20 brownies. She wants to split them into equal groups for the bake sale. Each group must have the same number of cookies and brownies, with none left over. What is the greatest number of groups she can make?
Fill in the blanks. For every _____ squares, there are _____ circles. 	Write the ratio of squares to circles in three different ways. _____ : _____ _____ to _____  	Write the ratio of apples to oranges in simplest form. 	To make hummingbird nectar you must use 4 cups of water and 1 cup of sugar. What is the ratio of water to sugar?